



# Science, Technology, & More!



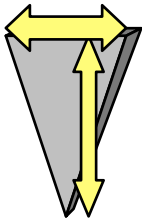
## Graded Exercise

## ME5: Figuring MA

In your last exercise, you showed images of the two measurements we need to figure out the Mechanical Advantage of a simple machine.

Here you will be given three simple machines and you will supply the measurements.

### Wedge




Input Distance	Output Distance
Ave:	Ave:

MA =

MA =

### Wheel/Axle

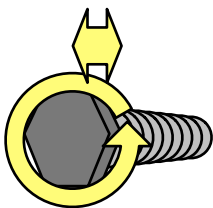


Input Distance	Output Distance
Ave:	Ave:

MA =

MA =

### Screw



Input Distance	Output Distance
Ave:	Ave:

MA =

MA =